











Name: _____

Rounding to the nearest hundred

Rounding Robots

Round the numbers on the robots to the nearest hundred. Draw a line from each robot to the correct battery.



0

100

200

300

400

500

600

700

800

900

1,000

ANSWER KEY

Rounding Robots

Round the numbers on the robots to the nearest hundred. Draw a line from each robot to the correct battery.

The worksheet shows ten robots and ten batteries. The robots have the following numbers and their rounded values:

- Robot 1: 746 (rounded to 700)
- Robot 2: 489 (rounded to 500)
- Robot 3: 757 (rounded to 800)
- Robot 4: 550 (rounded to 600)
- Robot 5: 969 (rounded to 1,000)
- Robot 6: 74 (rounded to 100)
- Robot 7: 27 (rounded to 0)
- Robot 8: 872 (rounded to 900)
- Robot 9: 220 (rounded to 200)
- Robot 10: 252 (rounded to 300)
- Robot 11: 361 (rounded to 400)

The batteries are labeled with the following values:

- 0
- 100
- 200
- 300
- 400
- 500
- 600
- 700
- 800
- 900
- 1,000

Red lines connect each robot to its rounded value in the battery column:

- 746 to 700
- 489 to 500
- 757 to 800
- 550 to 600
- 969 to 1,000
- 74 to 100
- 27 to 0
- 872 to 900
- 220 to 200
- 252 to 300
- 361 to 400