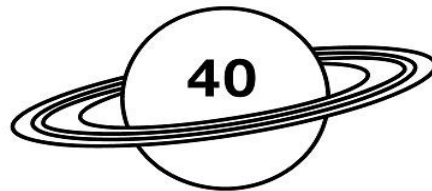




Name: _____




Rounding Rocket Ships

Round the numbers to the nearest ten. Draw a line from each rocket to the correct planet.



PREVIEW

Please log in or register to download the printable version of this worksheet.



Rounding Rocket Ships

Answer Key:

23 - 20
55 - 60
31 - 30
86 - 90
84 - 80
39 - 40
52 - 50
65 - 70

