

Name: \_\_\_\_\_

# Special Number

The special number is

# 3,049

Write the number in expanded form.

\_\_\_\_\_ + \_\_\_\_\_ + \_\_\_\_\_

The value of the digit 4 is \_\_\_\_\_.



The value of the digit 9 is \_\_\_\_\_.

The value of the digit 3 is \_\_\_\_\_.

**even**

**odd**

Which set of blocks shows 3,049? (Circle one.)




**Preview**  
Please log in to download the printable version of this worksheet.



1,000 more than 3,049 is \_\_\_\_\_.

100 less than 3,049 is \_\_\_\_\_.

100 more than 3,049 is \_\_\_\_\_.

1,000 less than 3,049 is \_\_\_\_\_.

3,049 has ...

\_\_\_\_\_ hundreds

\_\_\_\_\_ thousands

\_\_\_\_\_ ones

\_\_\_\_\_ tens

**Special Number**

The special number is

**3,049**

Write the number in expanded form.

3,000 + 40 + 9

The value of the digit 4 is 40.

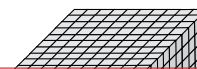

The value of the digit 9 is 9.

The value of the digit 3 is 3,000.

**even**

**odd**

Which set of blocks shows 3,049? (Circle one.)



**Preview**

Please log in to download the printable version of this worksheet.



1,000 more than 3,049 is 4,049.

100 less than 3,049 is 2,949.

100 more than 3,049 is 3,149.

1,000 less than 3,049 is 2,049.

3,049 has ...

0 hundreds

3 thousands

9 ones

4 tens