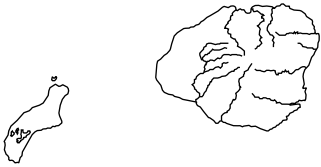
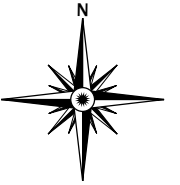
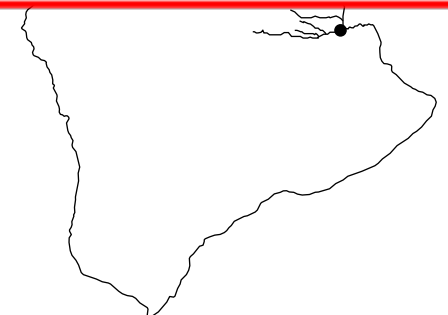
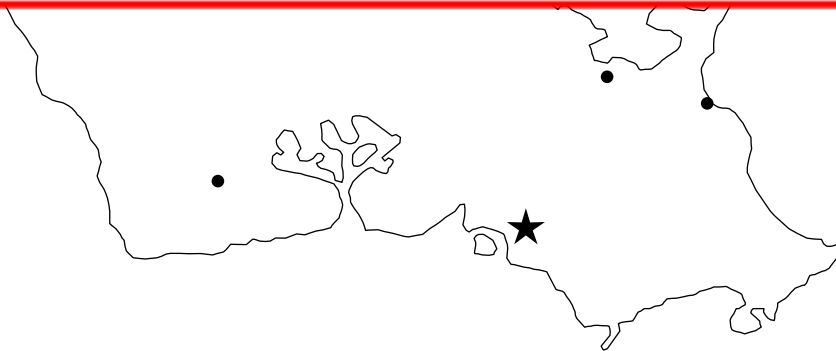


State of Hawaii



~ **PREVIEW** ~

Please log in or register to download
the printable version of this worksheet.



Name: _____

Label the following cities on your map.

- Hilo
- Honolulu
- Kailua
- Kane'ohe
- Kapolei

Label the following Hawaiian Islands on your map.

Label the following bodies of water on your map.

- 'Alenuihaha Channel
- Hilo Bay
- Kaiwi Channel
- Kane'ohe Bay
- Kaula'i Channel
- Pacific Ocean
- Pailolo Channel



~ **PREVIEW** ~

**Please log in or register to download
the printable version of this worksheet.**

- Barbers Point
- Cape Kumukahi
- Kaena Point
- Kahuku Point
- Mauna Kea
- Mauna Loa
- Sandy Island
- Upolu Point