


Name: _____

Name the Midwestern Region States

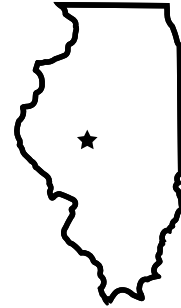
Write the name and capital for each state.



State: _____



State: _____



State: _____



Preview

Please log in to download
the printable version of this worksheet.

State: _____

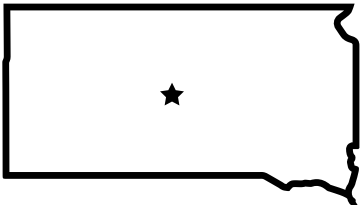
Capital: _____

State: _____

Capital: _____

State: _____

Capital: _____



State: _____

Capital: _____



State: _____

Capital: _____



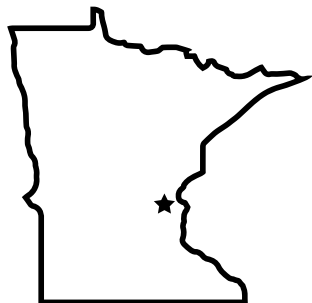
State: _____

Capital: _____

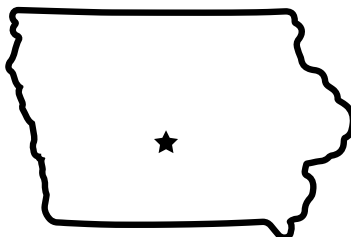
Name: _____

Name the Midwestern Region States

Write the name and capital for each state.



State: _____



State: _____



State: _____



Preview

Please log in to download
the printable version of this worksheet.

ANSWER KEY

Name the Midwestern Region States

Write the name and capital for each state.

Preview

Please log in to download
the printable version of this worksheet.



State: South Dakota

Capital: Pierre

State: Wisconsin

Capital: Madison

State: Kansas

Capital: Topeka

ANSWER KEY

Name the Midwestern Region States

Write the name and capital for each state.



Preview

Please log in to download
the printable version of this worksheet.

