




Name: \_\_\_\_\_

# Shape Subtraction



Subtract the number in the **pentagon** from the number in the **heart**.

Subtract the number in the **hexagon** from the number in the **circle**.

Subtract the number in the **square** from the number in the **trapezoid**.



# Preview





Please log in to download the printable version of this worksheet.

Subtract the number in the **star** from the number in the **octagon**.

Subtract the number in the **triangle** from the number in the **diamond**.

Subtract the number in the **pentagon** from the number in the **square**.

## Shape Subtraction



Subtract the number in the **pentagon** from the number in the **octagon**.

Subtract the number in the **hexagon** from the number in the **square**.

Subtract the number in the **circle** from the number in the **triangle**.



# Preview

Please log in to download the printable version of this worksheet.

Subtract the number in the **star** from the number in the **octagon**.

$$\begin{array}{r}
 505 \\
 - 262 \\
 \hline
 243
 \end{array}$$

Subtract the number in the **triangle** from the number in the **diamond**.

$$\begin{array}{r}
 949 \\
 - 180 \\
 \hline
 769
 \end{array}$$

Subtract the number in the **pentagon** from the number in the **square**.

$$\begin{array}{r}
 157 \\
 - 76 \\
 \hline
 81
 \end{array}$$