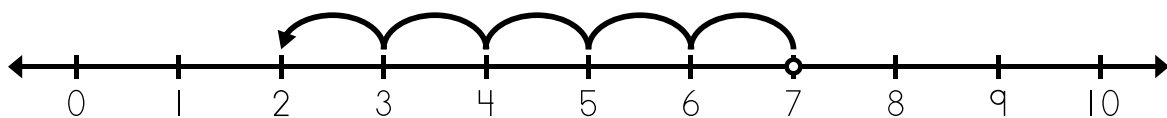


Name: \_\_\_\_\_

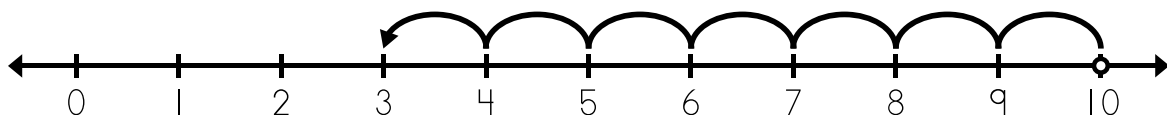
## Number Line Subtraction

a.



$$\underline{7} - \underline{5} = \underline{2}$$

b.



$$\underline{\quad} - \underline{\quad} = \underline{\quad}$$

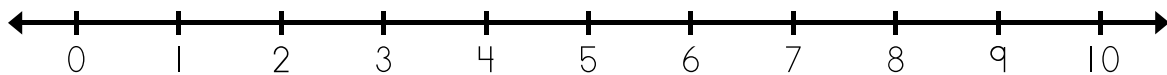


# Preview

Please log in to download  
the printable version of this worksheet.

$$\underline{\quad} - \underline{\quad} = \underline{\quad}$$

e. Use the number line to solve.



$$6 - 5 = \underline{\quad}$$

$$9 - 3 = \underline{\quad}$$

$$10 - 6 = \underline{\quad}$$

$$4 - 2 = \underline{\quad}$$

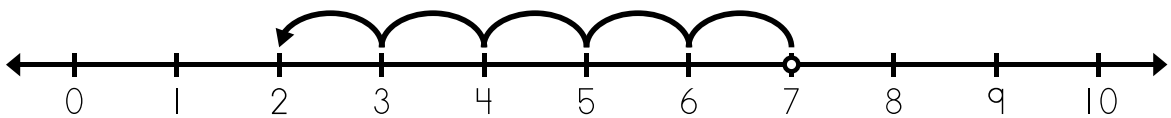
$$5 - 5 = \underline{\quad}$$

$$7 - 2 = \underline{\quad}$$

# ANSWER KEY

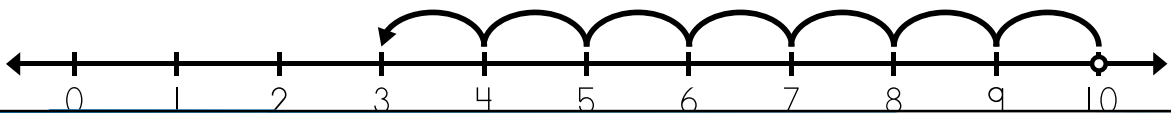
## Number Line Subtraction

a.



$$\underline{7} - \underline{5} = \underline{2}$$

b.



# Preview

Please log in to download  
the printable version of this worksheet.



$$10 - 6 = \underline{4}$$

$$4 - 2 = \underline{2}$$

$$5 - 5 = \underline{0}$$

$$7 - 2 = \underline{5}$$