

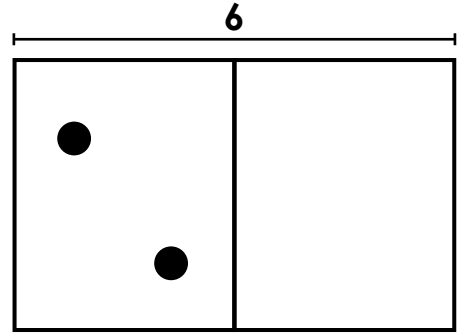
Name: \_\_\_\_\_

# Subtraction

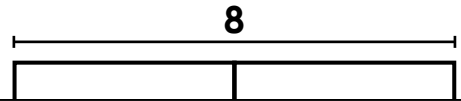
Complete the picture models to help find the answer to the subtraction questions.  
Write a subtraction fact for each.

- a. Bobby has 6 rocks.  
Some are black and some are white.  
If 2 are black, how many are white?

$$\underline{\quad\quad} - \underline{\quad\quad} = \underline{\quad\quad}$$



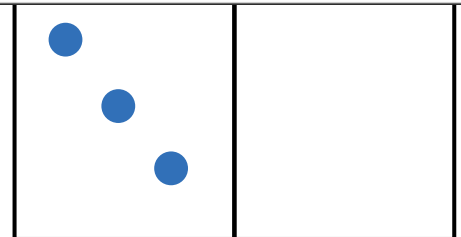
- b. Lin has 8 apples.



**Preview**  
Please log in to download  
the printable version of this worksheet.

- Some are blue and some are purple.  
If 3 are blue, how many are purple?

$$\underline{\quad\quad} - \underline{\quad\quad} = \underline{\quad\quad}$$



- d. Nolan has 5 toy cars.  
Some are red and some are yellow.  
If 4 are red, how many are yellow?

$$\underline{\quad\quad} - \underline{\quad\quad} = \underline{\quad\quad}$$

