


Name: _____

Rocket Subtraction

Help the rocket find the star. Follow the path and answer the subtraction facts along the way.



$12 - 8 =$

$11 - 7 =$

$7 - 3 =$

$15 - 5 =$

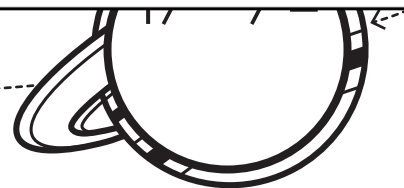
$4 - 4 =$



Preview

Please log in to download
the printable version of this worksheet.

$11 - 5 =$



$10 - 4 =$

$14 - 9 =$

$13 - 6 =$




ANSWER KEY

Minuends to 20;
Answers to 10

Rocket Subtraction

Help the rocket find the star. Follow the path and answer the subtraction facts along the way.



$$12 - 8 =$$

4

$$11 - 7 =$$

4

$$4 - 4 =$$

0

$$7 - 3 =$$

$$15 - 5 =$$



Preview

Please log in to download
the printable version of this worksheet.

$$11 - 5 =$$

6

$$11 - 1 =$$

10

$$10 - 4 =$$

6

$$13 - 6 =$$

7

$$14 - 9 =$$

5

