


# 1. Symmetry

Which letter has a line of symmetry?

**G Y R**

# 2. Symmetry


Which shape has one or more lines of symmetry?



club



crescent



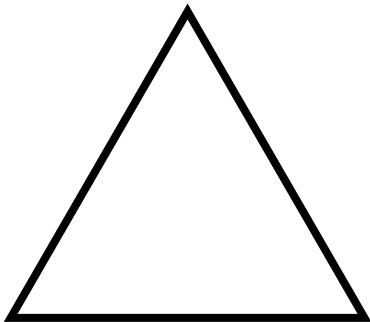
sun



# Preview


Please log in to download the printable version of this worksheet.

How many lines of symmetry does this shape have?



- ①    ②    ③    ⑥

Draw this shape. Then draw a dotted line to show a line of symmetry.




## 5. Symmetry

Which letter does not have a line of symmetry?

**Z W I**

## 6. Symmetry

Which shape has one or more lines of symmetry?



arrow

lightning bolt


spiral



# Preview

Please log in to download the printable version of this worksheet.

How many lines of symmetry does this shape have?



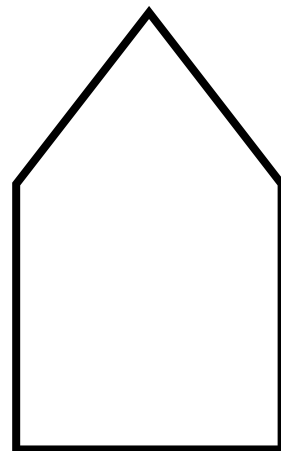
1

2

4

8

Draw this shape. Then draw a dotted line to show a line of symmetry.



9.

## Symmetry


Which letter has more than one line of symmetry?

A H E


10.

## Symmetry


Which shape has one or more lines of symmetry?



music note



hand



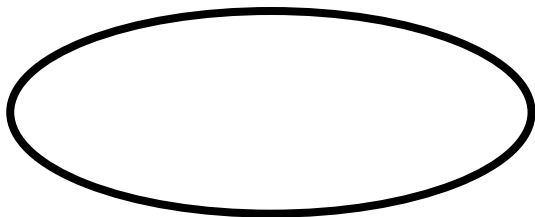
drop



## Preview

Please log in to download the printable version of this worksheet.

How many lines of symmetry does this shape have?



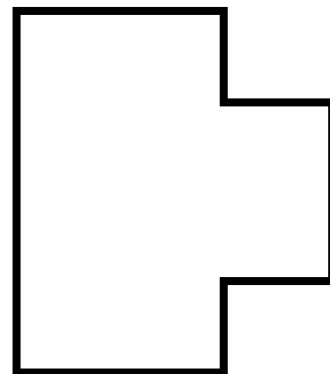
1

2

3

4

Draw this shape. Then draw a dotted line to show a line of symmetry.




### 13. Symmetry

Which letter does not have two lines of symmetry?

V O X

### 14. Symmetry


Which shape has one or more lines of symmetry?



plane



face



check mark



## Preview

Please log in to download the printable version of this worksheet.

How many lines of symmetry does this shape have?




1

2

4

6

Draw this shape. Then draw a dotted line to show a line of symmetry.



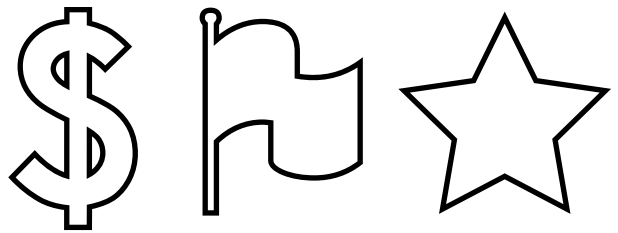
## 17. Symmetry

Which letter has the fewest lines of symmetry?

**I M Q**

## 18. Symmetry

Which shape has one or more lines of symmetry?



# Preview


Please log in to download the printable version of this worksheet.

How many lines of symmetry does this shape have?



- ①    ②    ③    ④

Draw this shape. Then draw a dotted line to show a line of symmetry.



Name: \_\_\_\_\_

## Task Cards: Symmetry

1. Which letter has a line of symmetry? \_\_\_\_\_
2. Which shape has one or more lines of symmetry? \_\_\_\_\_
3. How many lines of symmetry does this shape have? \_\_\_\_\_

4. Draw the shape. Then draw a dotted line to show a line of symmetry.



7. How many lines of symmetry does this shape have? \_\_\_\_\_
9. Which letter has more than one line of symmetry? \_\_\_\_\_
10. Which shape has one or more lines of symmetry? \_\_\_\_\_
11. How many lines of symmetry does this shape have? \_\_\_\_\_

12. Draw the shape. Then draw a dotted line to show a line of symmetry.

Name: \_\_\_\_\_

## Task Cards: Symmetry

13. Which letter does not have two lines of symmetry? \_\_\_\_\_

14. Which shape has one or more lines of symmetry? \_\_\_\_\_

15. How many lines of symmetry does this shape have? \_\_\_\_\_

16. Draw the shape. Then draw a dotted line to show a line of symmetry.



**Preview**  
Please log in to download the printable version of this worksheet.

19. How many lines of symmetry does this shape have? \_\_\_\_\_

# ANSWER KEY

## Task Cards: Symmetry

1. Which letter has a line of symmetry? Y

4. Draw the shape. Then draw a dotted line to show a line of symmetry.



# Preview

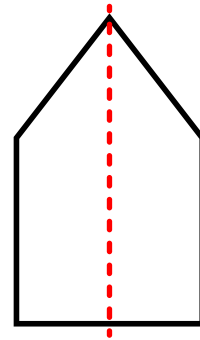
Please log in to download the printable version of this worksheet.

5. Which letter does not have a line of symmetry? Z

6. Which shape has one or more lines of symmetry? arrow

7. How many lines of symmetry does this shape have? 4

8. Draw the shape. Then draw a dotted line to show a line of symmetry.

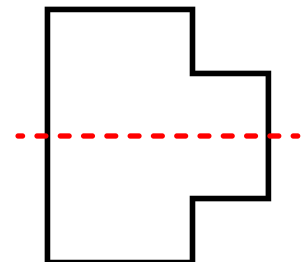


9. Which letter has more than one line of symmetry? H

10. Which shape has one or more lines of symmetry? drop

11. How many lines of symmetry does this shape have? 2

12. Draw the shape. Then draw a dotted line to show a line of symmetry.





# ANSWER KEY

## Task Cards: Symmetry

13. Which letter does not have two lines of symmetry?

V

16. Draw the shape. Then draw a dotted line to show a line of symmetry.

⋮

# Preview

Please log in to download the printable version of this worksheet.



## Task Cards: Symmetry

This file contains 20 task cards.

There are countless ways to use task cards in your classroom.  
Here are a few ideas:

# Preview

Please log in to download  
the printable version of this worksheet.



Have a parent, friend, or volunteer sit with individual students who need extra help. They can practice by solving the problems on the task cards together.