

Name: _____

Ten Frames

Write the answer for each addition problem.

a.

●	
●	
●	
●	

 +

●	
●	
●	

 = 7

b.

●	
●	
●	
●	●
●	●

 +

●	
●	
●	
●	●
●	●

 = _____

c.

--	--

 +

●	
---	--

d.

●	●
---	---

 +

●	
---	--



~ PREVIEW ~

Please log in or register to download the printable version of this worksheet.

●	
●	
●	
●	

 +

●	
●	●
●	●
●	●
●	●

 = _____

●	
●	
●	●
●	●
●	●

 +

●	
●	

 = _____

g.

●	
●	
●	
●	
●	

 +

●	
●	
●	
●	●
●	●

 = _____

h.

●	●
●	●
●	●
●	●
●	●

 +

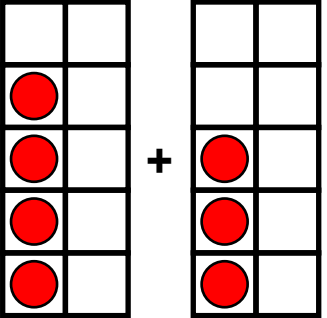
●	
●	
●	
●	
●	

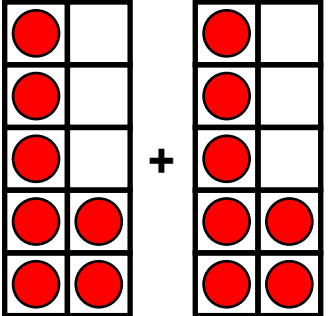
 = _____

ANSWER KEY

Ten Frames

Write the answer for each addition problem.

a.  + = 7

b.  + = 14

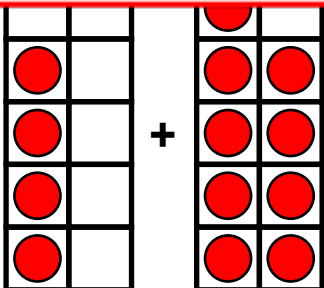
c. 

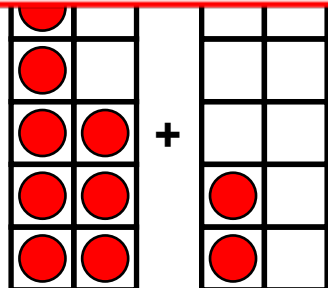
d. 

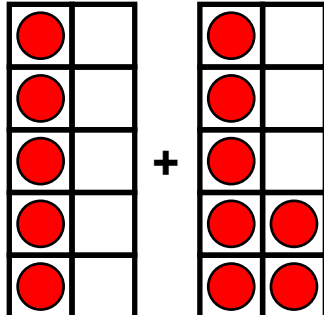


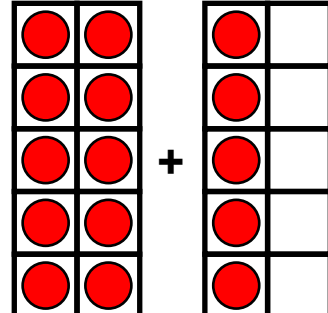
~ PREVIEW ~

Please log in or register to download the printable version of this worksheet.

 + = 13

 + = 10

g.  + = 12

h.  + = 15