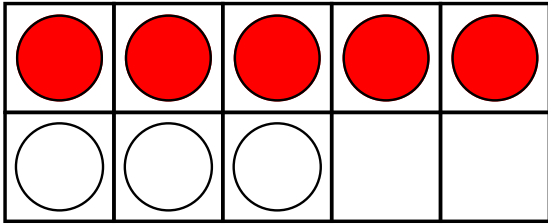


Name: _____

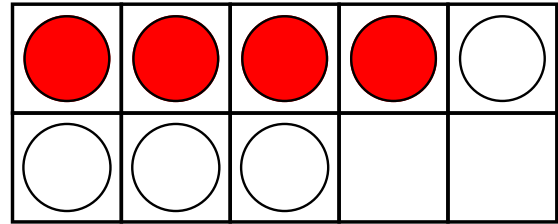
Adding With Ten-Frames

Add.




$$5 + 3 = \square$$

Add.




$$4 + 4 = \square$$

Draw counters. Find the sum.

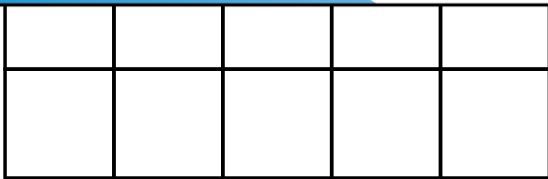


Draw counters. Find the sum.

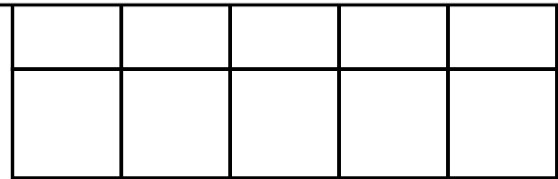


Preview

Please log in to download
the printable version of this worksheet.

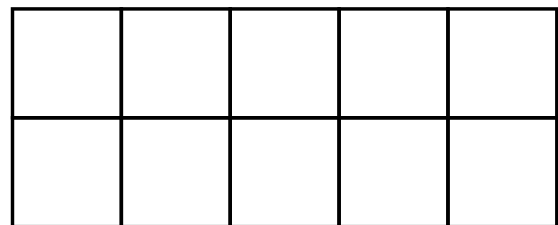


$$2 + 5 = \square$$



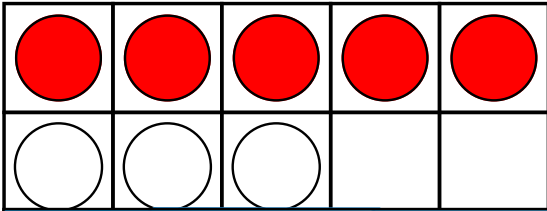
$$6 + 4 = \square$$

Draw **4** white counters.
Draw **2** gray counters.
Write an addition fact to
show how many in all.

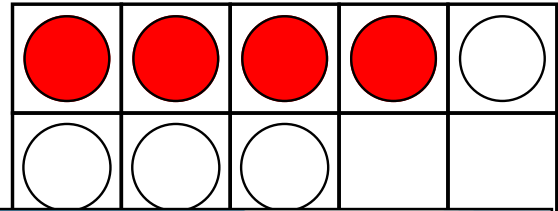


Adding With Ten-Frames

Add.



Add.



Draw

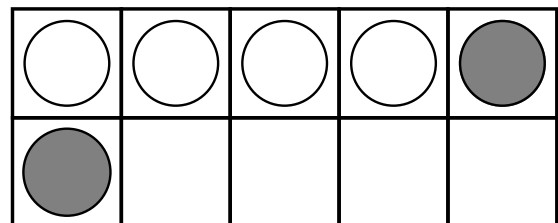
Preview

Please log in to download
the printable version of this worksheet.



Draw

Draw **4** white counters.
Draw **2** gray counters.
Write an addition fact to
show how many in all.



$$4 + 2 = 6$$