



Name: \_\_\_\_\_

# Converting Time



Convert these hours into minutes.

a. 4 hours = \_\_\_\_\_ minutes

b. 6 hours = \_\_\_\_\_ minutes

c. 3 hours = \_\_\_\_\_ minutes

d. 2 hours = \_\_\_\_\_ minutes

e. 5 hours = \_\_\_\_\_ minutes

Convert these minutes into hours and minutes.

f. 60 minutes = \_\_\_\_\_ hour \_\_\_\_\_ minutes

g. 125 minutes = \_\_\_\_\_ hours \_\_\_\_\_ minutes

h. 600 minutes = \_\_\_\_\_ hours \_\_\_\_\_ minutes


i. 460 minutes = \_\_\_\_\_ hours \_\_\_\_\_ minutes

j. 50 minutes = \_\_\_\_\_ hours \_\_\_\_\_ minutes

k. 330 minutes = \_\_\_\_\_ hours \_\_\_\_\_ minutes



## Converting Time



Convert these hours into minutes.


a. 4 hours = 240 minutes

b. 6 hours = 360 minutes

c. 3 hours = 180 minutes

d. 2 hours = 120 minutes

e. 5 hours = 300 minutes



Convert these minutes into hours and minutes.

f. 60 minutes = 1 hour 0 minutes

g. 125 minutes = 2 hours 5 minutes

h. 600 minutes = 10 hours 0 minutes

i. 460 minutes = 7 hours 40 minutes

j. 50 minutes = 0 hours 50 minutes

k. 330 minutes = 5 hours 30 minutes

