

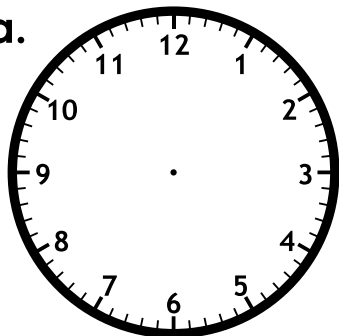
Name: _____

Time: Nearest Minute

Telling Time

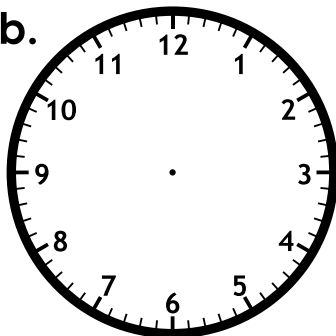
Draw the hands on the clocks to show the given time.
Be sure the hour hand is shorter than the minute hand.

a.



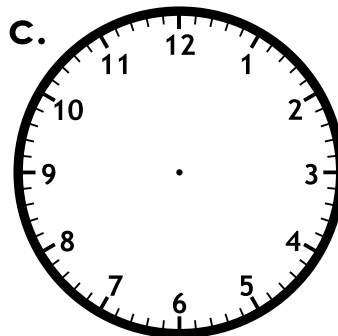
6:18

b.



3:21

c.



11:09



Preview

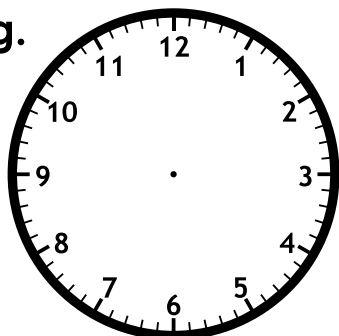
Please log in to download
the printable version of this worksheet.

8:48

5:33

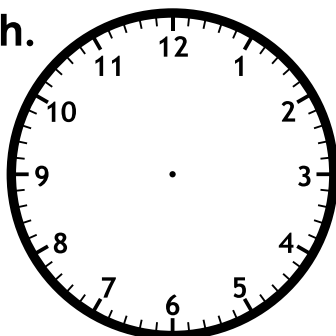
7:12

g.



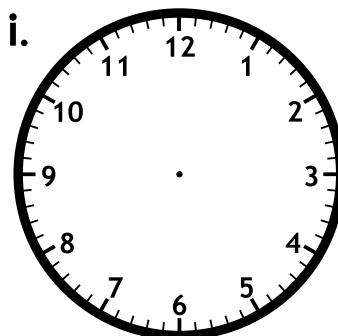
1:59

h.



1:07

i.



9:44

Telling Time

Draw the hands on the clocks to show the given time.
Be sure the hour hand is shorter than the minute hand.

a.



b.



c.



Preview

Please log in to download
the printable version of this worksheet.



1:59



1:07



9:44