

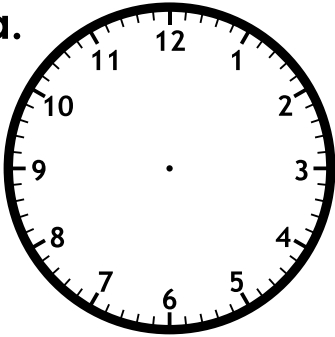
Name: _____

Time: Quarter Hours

Telling Time

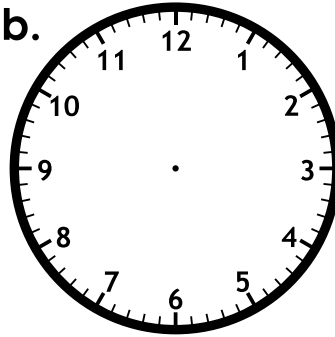
Draw the hands on the clocks to show the given time.
Be sure the hour hand is shorter than the minute hand.

a.



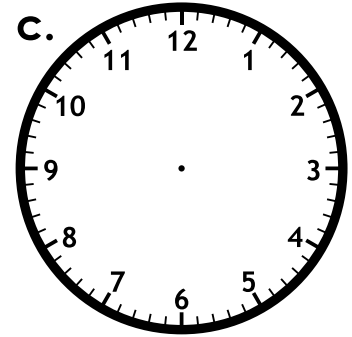
quarter to 7

b.



quarter after 9

c.



half past 1



Preview

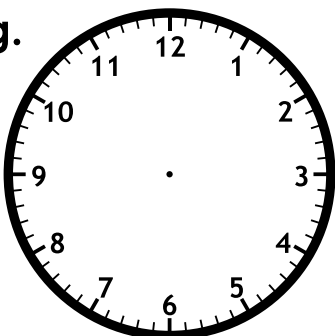
Please log in to download
the printable version of this worksheet.

quarter after 11

half past 5

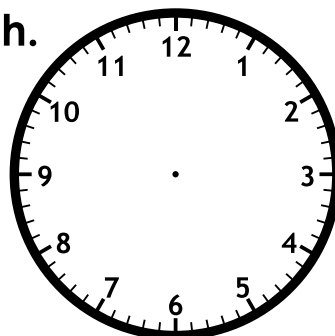
quarter to 11

g.



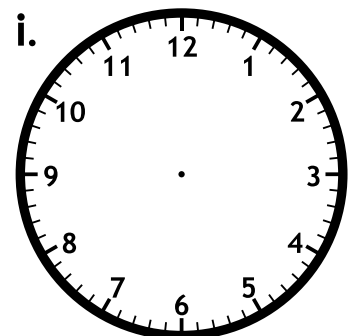
half past 12

h.



quarter to 4

i.



quarter after 6

Telling Time

Draw the hands on the clocks to show the given time.
Be sure the hour hand is shorter than the minute hand.

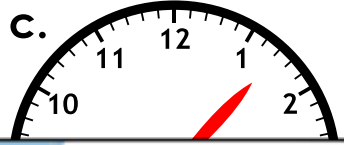
a.



b.



c.



Preview

Please log in to download
the printable version of this worksheet.



half past 12



quarter to 4



quarter after 6