

Name: _____

Time: Quarter After &
Quarter To

Telling Time


Write each time using the phrases **quarter to**, **quarter after**, **half past**, and **o'clock**.

5:00 – five o'clock


5:15 – quarter after five (or, quarter past five)

5:30 – half past five

5:45 – quarter to six (or, quarter till six)



a. 6:30 _____



Preview

Please log in to download
the printable version of this worksheet.

e. 11:30 _____

f. 7:15 _____

g. 12:45 _____

h. 1:15 _____

i. 2:30 _____

j. 7:45 _____

k. 8:15 _____

ANSWER KEY

Telling Time


Write each time using the phrases **quarter to**, **quarter after**, **half past**, and **o'clock**.

5:00 – five o'clock

5:15 – quarter after five (or, quarter past five)

5:30 – half past five

5:45 – quarter to six (or, quarter till six)



Preview

Please log in to download
the printable version of this worksheet.



j. 7:45

quarter to eight

k. 8:15

quarter after eight