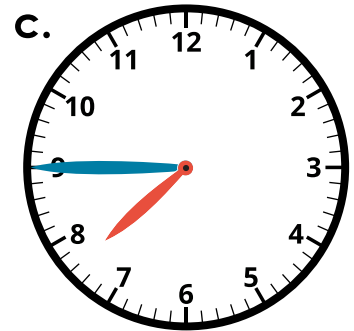
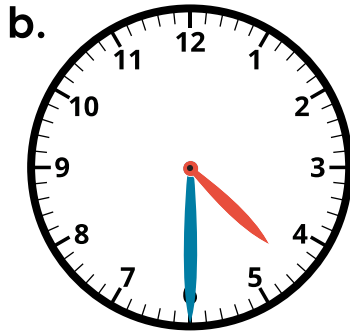
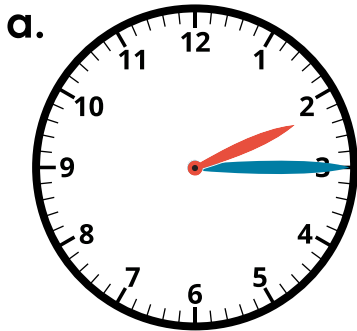


Telling Time

To the Nearest Quarter Hour

Write the time shown on each clock. Write it the "regular way" and using the phrases *quarter to*, *quarter after*, *half past*, or *o'clock*. The first one has been done for you.



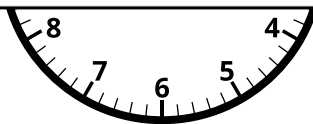


Preview

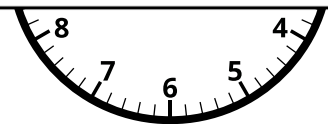
Please log in to download the printable version of this worksheet.



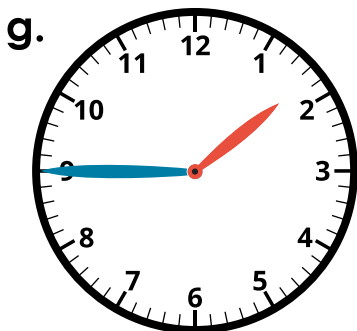
_____ : _____



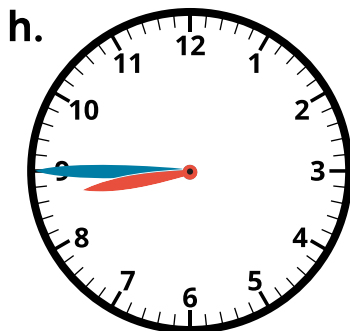
_____ : _____



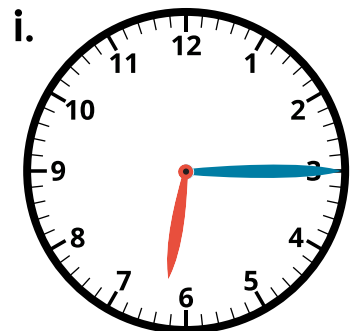
_____ : _____



_____ : _____



_____ : _____

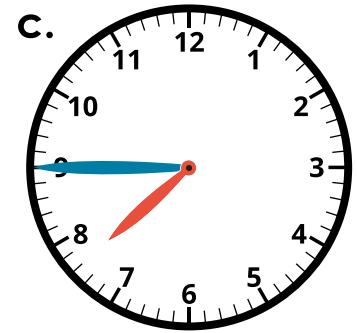
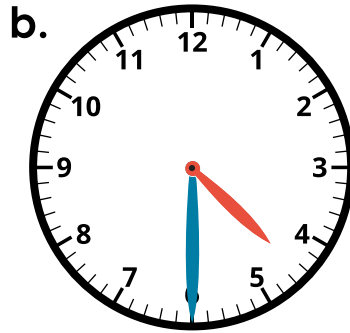
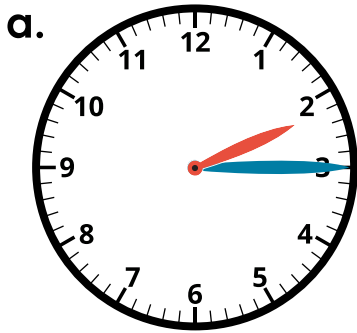


_____ : _____

Telling Time

To the Nearest Quarter Hour

Write the time shown on each clock. Write it the "regular way" and using the phrases *quarter to*, *quarter after*, *half past*, or *o'clock*. The first one has been done for you.




Preview

Please log in to download the printable version of this worksheet.



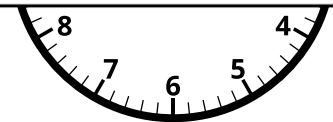
5:30

half past five



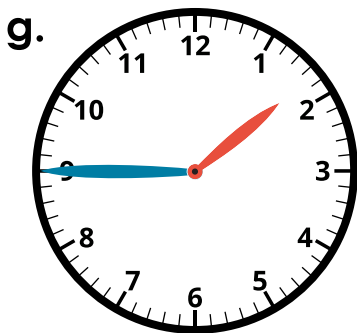
9:45

quarter to ten



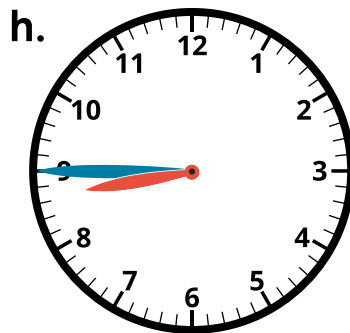
12:15

quarter after twelve



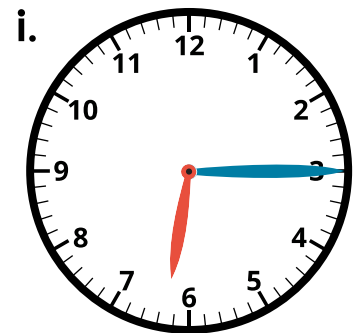
1:45

quarter to two



8:45

quarter to nine



6:15

quarter after six