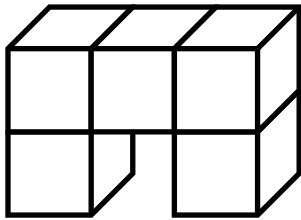


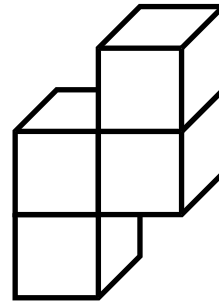
## 1. Volume Cubes

Count the cubes to find the volume of the shape.



## 2. Volume Cubes


Count the cubes to find the volume of the shape.



# Preview

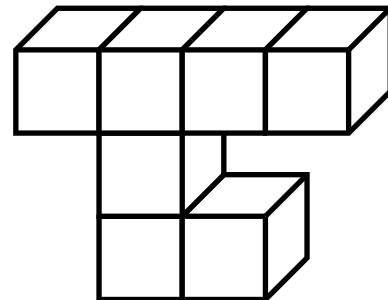
Please log in to download the printable version of this worksheet.

Count the cubes to find the volume of the shape.



Remember to write "cubic units" after your answer.


Count the cubes to find the volume of the shape.



Remember to write "cubic units" after your answer.

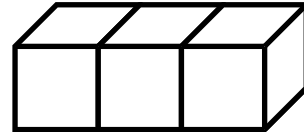
## 5. Volume Cubes

Count the cubes to find the volume of the shape.



## 6. Volume Cubes


Count the cubes to find the volume of the shape.



# Preview

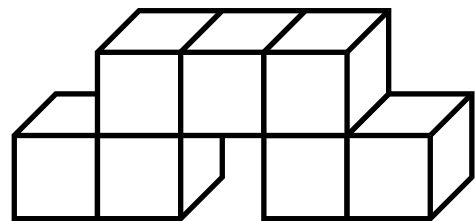
Please log in to download the printable version of this worksheet.

Count the cubes to find the volume of the shape.



Remember to write "cubic units" after your answer.


Count the cubes to find the volume of the shape.



Remember to write "cubic units" after your answer.

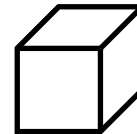
## 9. Volume Cubes

Count the cubes to find the volume of the shape.



## 10. Volume Cubes

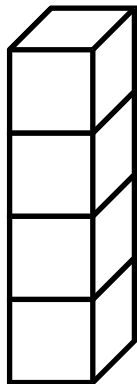
Count the cubes to find the volume of the shape.



# Preview

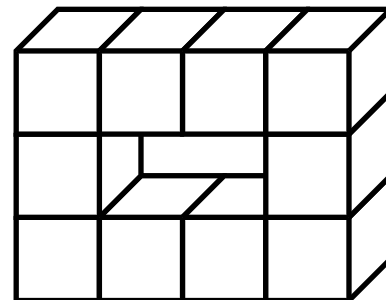
Please log in to download the printable version of this worksheet.

Count the cubes to find the volume of the shape.



Remember to write "cubic units" after your answer.

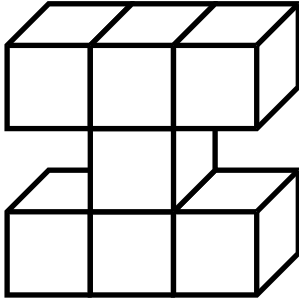
Count the cubes to find the volume of the shape.



Remember to write "cubic units" after your answer.

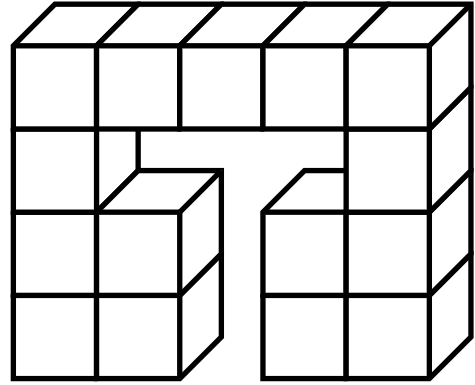
## 13. Volume Cubes

Count the cubes to find the volume of the shape.



## 14. Volume Cubes


Count the cubes to find the volume of the shape.



# Preview

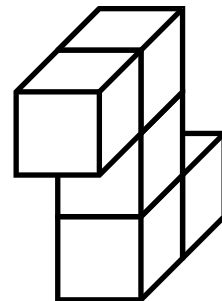
Please log in to download the printable version of this worksheet.

Count the cubes to find the volume of the shape.



Remember to write "cubic units" after your answer.


Count the cubes to find the volume of the shape.



Remember to write "cubic units" after your answer.

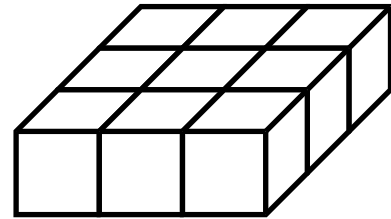
## 17. Volume Cubes

Count the cubes to find the volume of the shape.



## 18. Volume Cubes

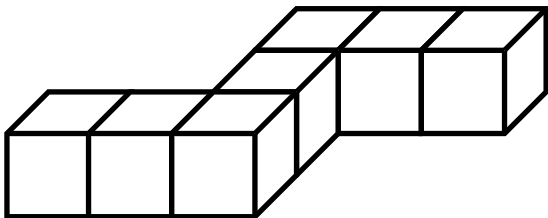
Count the cubes to find the volume of the shape.



# Preview

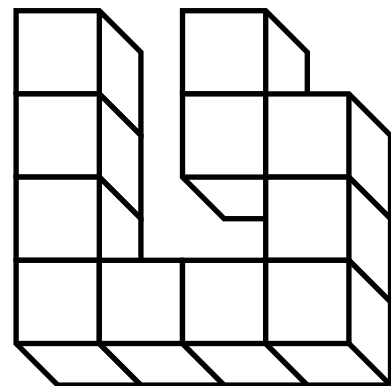
Please log in to download the printable version of this worksheet.

Count the cubes to find the volume of the shape.



Remember to write "cubic units" after your answer.

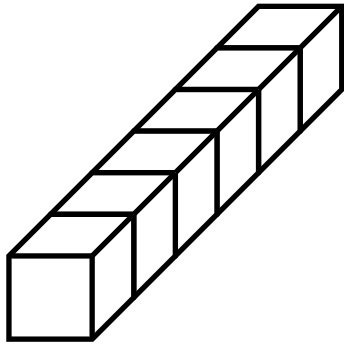
Count the cubes to find the volume of the shape.



Remember to write "cubic units" after your answer.

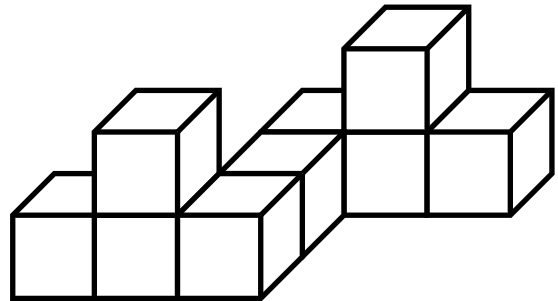
## 21. Volume Cubes

Count the cubes to find the volume of the shape.



## 22. Volume Cubes

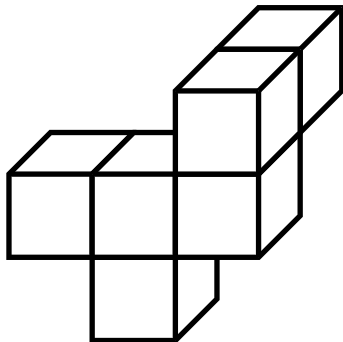
Count the cubes to find the volume of the shape.



# Preview


Please log in to download the printable version of this worksheet.

Count the cubes to find the volume of the shape.



Remember to write "cubic units" after your answer.

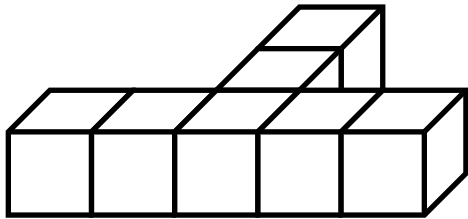
Count the cubes to find the volume of the shape.



Remember to write "cubic units" after your answer.

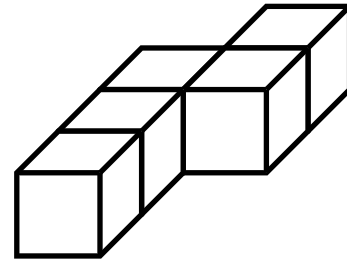
## 25. Volume Cubes

Count the cubes to find the volume of the shape.



## 26. Volume Cubes

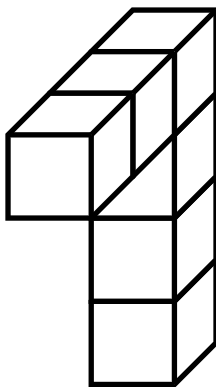
Count the cubes to find the volume of the shape.



# Preview

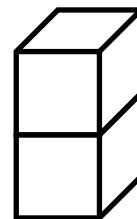
Please log in to download the printable version of this worksheet.

Count the cubes to find the volume of the shape.



Remember to write "cubic units" after your answer.

Count the cubes to find the volume of the shape.



Remember to write "cubic units" after your answer.

## 29. Volume Cubes

Count the cubes to find the volume of the shape.



## 30. Volume Cubes

Count the cubes to find the volume of the shape.



# Preview

Please log in to download the printable version of this worksheet.

Remember to write cubic units after your answer.

Remember to write cubic units after your answer.



Name: \_\_\_\_\_

## Task Cards: Volume Cubes

1. \_\_\_\_\_

16. \_\_\_\_\_

2. \_\_\_\_\_

17. \_\_\_\_\_

# Preview

Please log in to download  
the printable version of this worksheet.



14. \_\_\_\_\_

29. \_\_\_\_\_

15. \_\_\_\_\_

30. \_\_\_\_\_

# ANSWER KEY

## Task Cards: Volume Cubes

1. 5 cubic units

16. 5 cubic units

2. 4 cubic units

17. 9 cubic units

# Preview

Please log in to download  
the printable version of this worksheet.



14. 15 cubic units

29. 10 cubic units

15. 7 cubic units

30. 16 cubic units

## Task Cards: Volume Cubes

This file contains 30 task cards.

There are countless ways to use task cards in your classroom.  
Here are a few ideas:

# Preview

*Please log in to download  
the printable version of this worksheet.*



Have a parent, friend, or volunteer sit with individual students who need extra help. They can practice by solving the problems on the task cards together.