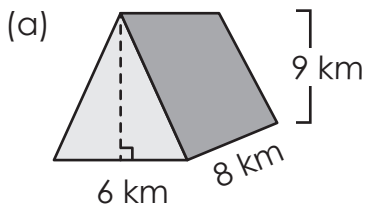


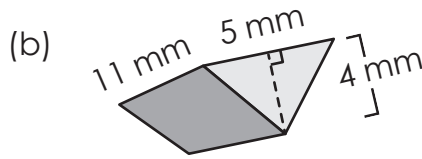
Name: _____

Volume of Triangular Prisms

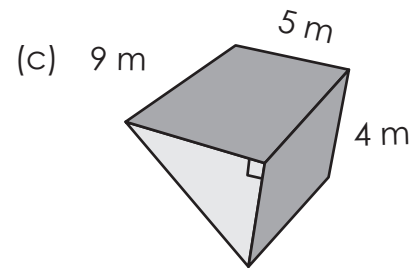
Find the volume.



volume = _____ km^3



volume = _____ mm^3

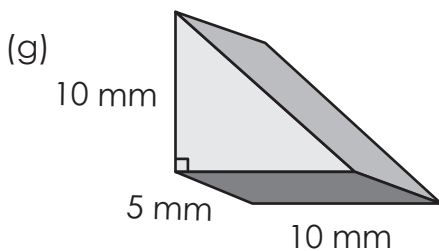


volume = _____ m^3

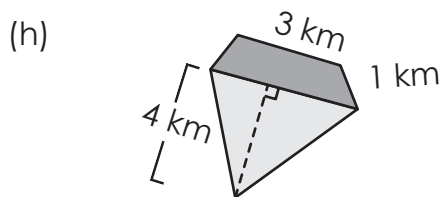


Preview

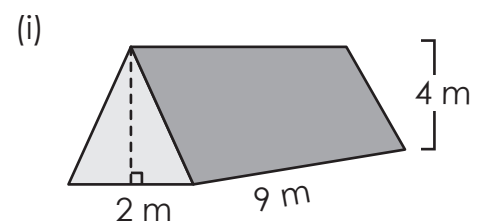
Please log in to download
the printable version of this worksheet.



volume = _____ mm^3



volume = _____ km^3

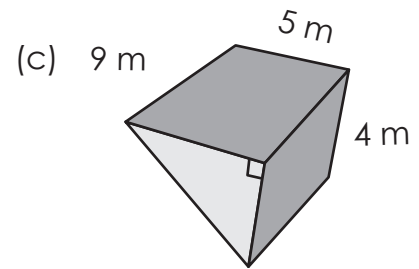
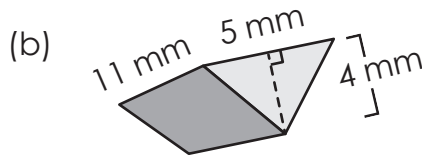
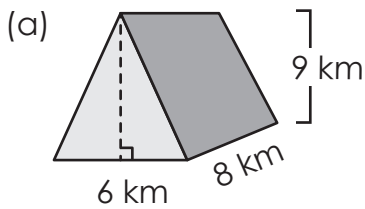


volume = _____ m^3

Answer Key

Volume of Triangular Prisms

Find the volume.



Preview

Please log in to download
the printable version of this worksheet.

