

# Mixed Math: B-4

1. Jimmy has seventy-five cents. He spends a quarter on gum. How much money does he have left?  
*Show your work.*

3. What time is shown on the clock?



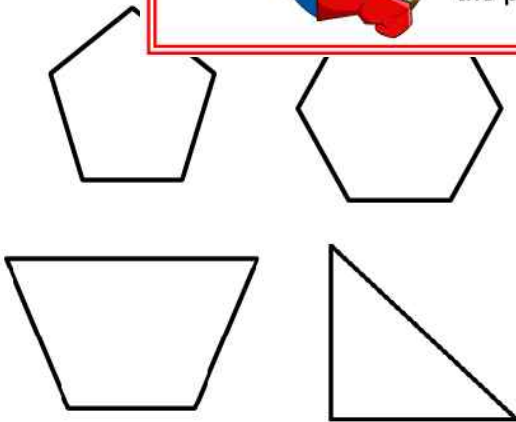
answ



**PREVIEW**

Please log in or register to download the printable version of this worksheet.

2.



4. Subtract 02 from 71.  
*Show your work.*

Write the letter **A** in the **triangle**.

Write the letter **B** in the **hexagon**.

Write the letter **C** in the **pentagon**.

Write the letter **D** in the **trapezoid**.

answer: \_\_\_\_\_

# ANSWER KEY

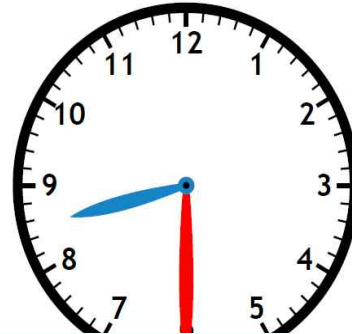
Skills: Money, Add/subtract, Geometry, Time

## Mixed Math: B-4

1. Jimmy has seventy-five cents. He spends a quarter on gum. How much money does he have left?

Show your work.

3. What time is shown on the clock?

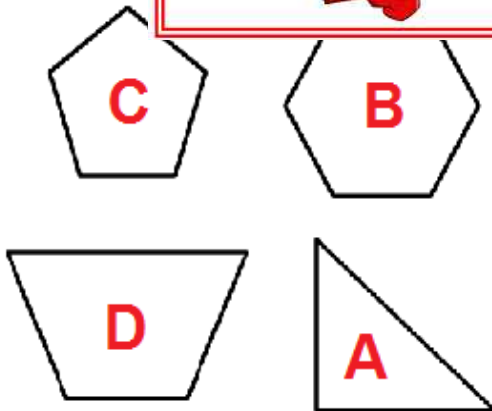


 **PREVIEW**

Please log in or register to download the printable version of this worksheet.

**8:30**

2.



Show your work.

Write the letter **A** in the **triangle**.

Write the letter **B** in the **hexagon**.

Write the letter **C** in the **pentagon**.

Write the letter **D** in the **trapezoid**.

answer: **39**